





Write the shaded amount in word form.

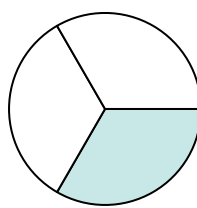
Ex)




1)



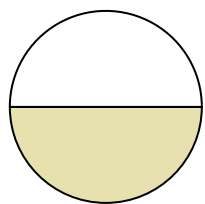
2)



3)



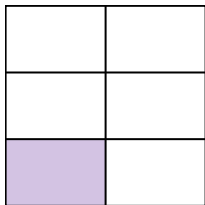
4)



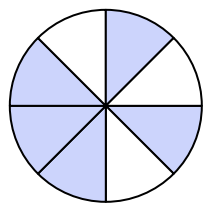
5)



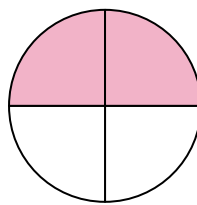
6)



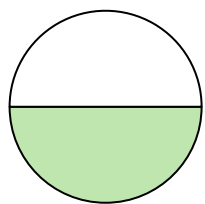
7)




8)




9)




10)




11)




12)



13)



14)

**Answers**

Ex.

one-fifth

1.

2.

3.

4.

5.

6.

7.

8.

9.

10.

11.

12.


13.

14.




Write the shaded amount in word form.

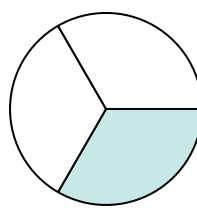
Ex)




1)



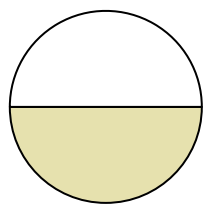
2)



3)



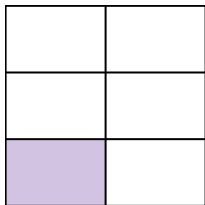
4)



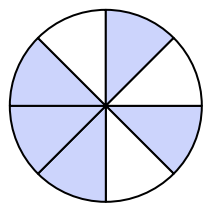
5)



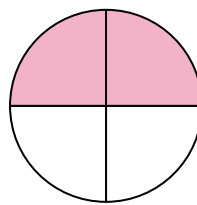
6)



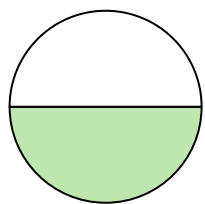
7)




8)




9)




10)




11)




12)



13)



14)

**Answers**

Ex.

one-fifth

1.

two-eighths

2.

one-third

3.

one-fourth

4.

one-half

5.

three-eighths

6.

one-fifth

7.

five-eighths

8.

two-fourths

9.

one-half

10.

one-third

11.

one-half

12.

one-third

13.

one-fifth

14.

one-fourth